



Part - III  
Class - I<sup>st</sup>  
Subject - Maths

Count and circle the correct number.



5      4      6



2      4      7



7      5      8

9      4      8


# Numbers and number names

(1 to 10)



1

one




2

Two



3

Three




4

Four




5

Five



6

Six



7

Seven



8

Eight



9

Nine



10

Ten

## Activity

Learn and write the table of 2

$$2 \times 1 = 2$$

$$2 \times 2 = 4$$

$$2 \times 3 = 6$$

$$2 \times 4 = 8$$

$$2 \times 5 = 10$$

$$2 \times 6 = 12$$

$$2 \times 7 = 14$$

$$2 \times 8 = 16$$

$$2 \times 9 = 18$$

$$2 \times 10 = 20$$