


PART-4  
CLASS-LKG  
SUBJECT-MATHS


1. count and match




2



1



4



3

2 Learn and write the numbers  
from 21 to 30

TO TO TO TO

21

22

23

24

25

26

27

28

29

30

3. Write the missing numbers  
from 11 to 20

11

20